



Determine if the angle shown is 'less', 'more' or 'equal' to 90°.

Answers

Ex)



1)



2)



Ex. equal

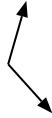
1. _____

2. _____

3)



4)



5)



3. _____

4. _____

5. _____

6)



7)



8)



6. _____

7. _____

8. _____

9)



10)



11)

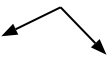


9. _____

10. _____

11. _____

12)



13)



14)



12. _____

13. _____

14. _____

15)



16)



17)

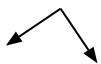


15. _____

16. _____

17. _____

18)



19)



20)



18. _____

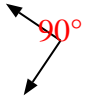
19. _____

20. _____



Determine if the angle shown is 'less', 'more' or 'equal' to 90° .

Ex)



1)



2)



Ex. equal

3)



4)



5)



1. more

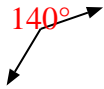
2. less

3. less

4. more

5. more

6)



7)



8)



6. more

7. equal

8. less

9)



10)



11)

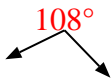


9. less

10. less

11. equal

12)



13)



14)



12. more

13. less

14. less

15)



16)



17)

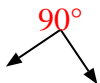


15. equal

16. more

17. more

18)



19)



20)



18. equal

19. equal

20. equal